











# Antriebsformen von Schrauben

## Fragen zum Basic-Sheet - Der Check!

### 1. Benennen Sie die folgenden Antriebsformen:



Antworten:

- a) Clutch
- b) Mortorq
- c) Phillips
- d) Spanner
- e) Torq-Set
- f) Pozidriv
- g) Torx Tamper Resistant
- h) Torx Plus
- i) Torx
- j) TriWing